

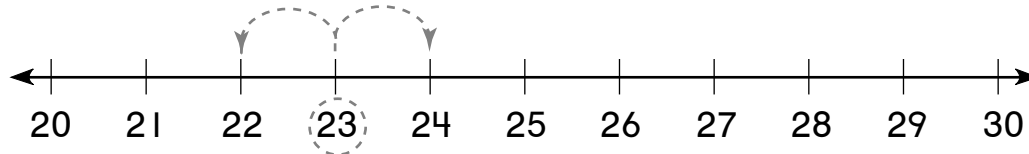


Order Numbers to 100

Use the number line. Find the number in the square and circle it.
Draw  to show **one more than**. Draw  to show **one less than**.

Write the number.

1.



One less than **23** is 22. One more than **23** is 24.

2.



One less than **46** is _____. One more than **46** is _____.

3.





One less than **63** is _____. One more than **63** is _____.

4.



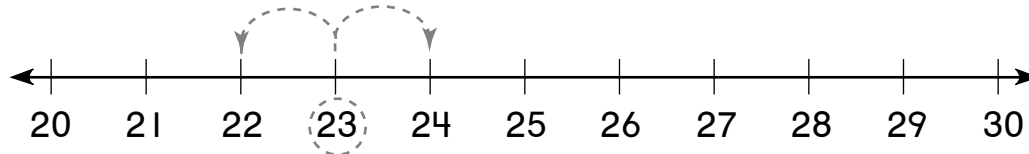
One less than **57** is _____. One more than **57** is _____.

Order Numbers to 100

Use the number line. Find the number in the square and circle it.
Draw  to show **one more than**. Draw  to show **one less than**.

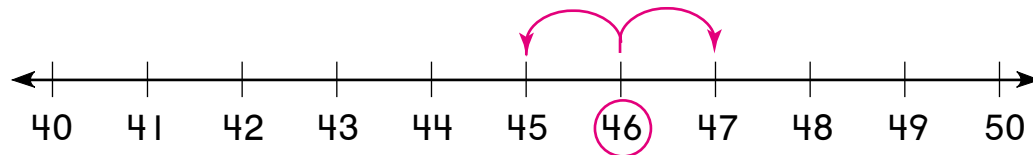
Write the number.

1.



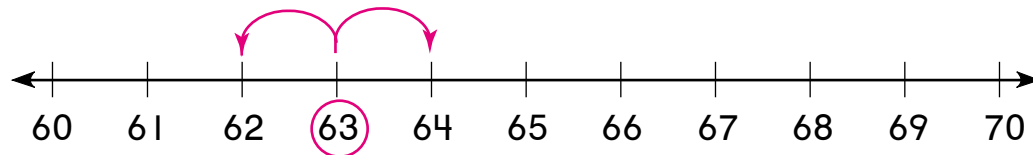
One less than **23** is 22. One more than **23** is 24.

2.



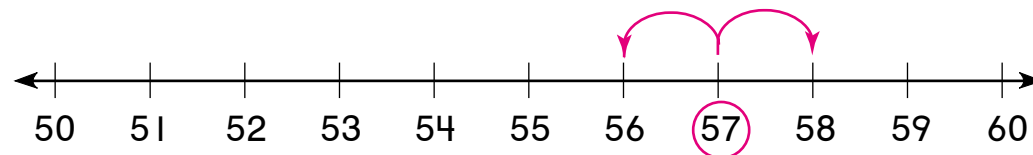
One less than **46** is 45. One more than **46** is 47.

3.



One less than **63** is 62. One more than **63** is 64.

4.



One less than **57** is 56. One more than **57** is 58.