



# Algebra: Compare Numbers: $>$ , $<$ , or $=$

is greater than  $>$ 

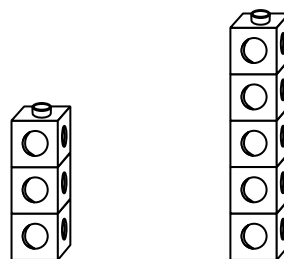
5 is greater than 3.

$$5 > 3$$

is equal to  $=$ 

5 is equal to 5.

$$5 = 5$$

is less than  $<$ 

3 is less than 5.

$$3 < 5$$

Count.


Write how many.

Then write  $>$ ,  $<$ , or  $=$  in the circle.

1.



8



6

2.



\_\_\_\_\_



\_\_\_\_\_

3.



\_\_\_\_\_



\_\_\_\_\_

4.




\_\_\_\_\_




\_\_\_\_\_

# Algebra: Compare Numbers: $>$ , $<$ , or $=$

is greater than  $>$ 

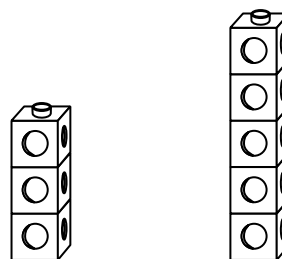
5 is greater than 3.

$$5 > 3$$

is equal to  $=$ 

5 is equal to 5.

$$5 = 5$$

is less than  $<$ 

3 is less than 5.

$$3 < 5$$

Count.


Write how many.

Then write  $>$ ,  $<$ , or  $=$  in the circle.

1.



8



6

2.



5



9

3.



7



7

4.



7



5