

Problem Solving • Find a Pattern

Write the missing numbers.

1.


number of owls	1	2	3	4
number of eyes	2	4	6	8

4 owls have 8 eyes.

2.

number of chairs	1	2	3	4
number of legs	4		12	16

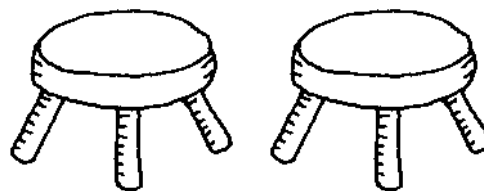
2 chairs have _____ legs.



3.

number of stools	1	2	3	4
number of legs	3		9	12

2 stools have _____ legs.



Problem Solving • Find a Pattern

Write the missing numbers.


1.

number of owls	1	2	3	4
number of eyes	2	4	6	8

4 owls have 8 eyes.

2.

number of chairs	1	2	3	4
number of legs	4	8	12	16

2 chairs have 8 legs.

3.

number of stools	1	2	3	4
number of legs	3	6	9	12

2 stools have 6 legs.